

[ひいてみよう]

使い方イメージ

引き算して、空欄に答えを書き込むよ。
横の列、縦の列をそれぞれ計算するよ。
式の通りになるかな？

5	-	3	=	2
2	-	1	=	1
3	-	2	=	1

ひいてみよう

7	-	2	=	5
3	-	1	=	2
4	-	1	=	3

Kids Creative and Design, Inc. Hands On Project 2009/1/15

5-2=3だよ
4-1=3だ！

5	-	3	=	
	■		■	
2	-	1	=	
	■		■	
	-		=	

ひいてみよう

7	-	2	=	
	■		■	
3	-	1	=	
	■		■	
	-		=	

Kids Creative and Design, Inc. Hands On Project 2009/1/29

9	-	7	=	
3	-	2	=	
	-		=	

ひいてみよう

12	-	1	=	
4	-	1	=	
	-		=	





Kids Creative and Design, Inc. Hands On Project 2009/1/29

10	-	5	=	
6	-	2	=	
	-		=	





ひいてみよう

16	-	4	=	
7	-	1	=	
	-		=	

Kids Creative and Design, Inc. Hands On Project 2009/1/29

15	—	6	=	
I		I		I
9	—	3	=	
II		II		II
	—		=	

ひいてみよう

17	—	6	=	
I		I		I
4	—	2	=	
II		II		II
	—		=	

Kids Creative and Design, Inc. Hands On Project 2009/1/29

20	—	14	=	
10	—	8	=	
	—		=	

18	—	9	=	
5	—	3	=	
	—		=	