

[数をいれよう1]

使い方イメージ



数えよう1


and Design, Inc. Hands On Project 2009/1/21

最初は8こ。
いくつかと2こひいたら残りは3こ...
分かった、3こだ！

A visual equation consisting of three rectangular boxes. The first box on the left contains one small circle. To its right is a plus sign. The second box contains three small circles arranged in a diagonal line from top-left to bottom-right. To its right is an equals sign. The final box on the right is empty.

A visual equation consisting of three rectangular boxes. The first box on the left is empty. To its right is a plus sign. The second box contains five small circles arranged in a pentagonal pattern. To its right is an equals sign. The final box on the right contains five small circles arranged in a pentagonal pattern, identical to the second box.


A visual equation consisting of three rectangular boxes. The first box on the left contains eight small circles arranged in three vertical columns: the left and right columns have three circles each, and the middle column has two circles. To its right is a plus sign. The second box is empty. To its right is an equals sign. The final box on the right contains eight small circles arranged in three vertical columns: the left and right columns have three circles each, and the middle column has two circles, identical to the first box.




+





=




+



=

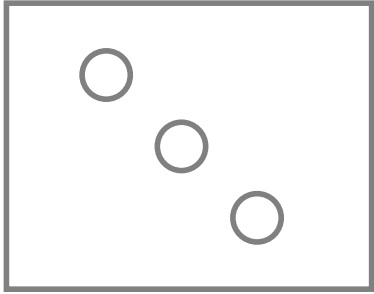


+




=






—




=



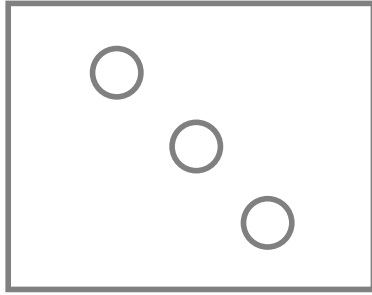
—



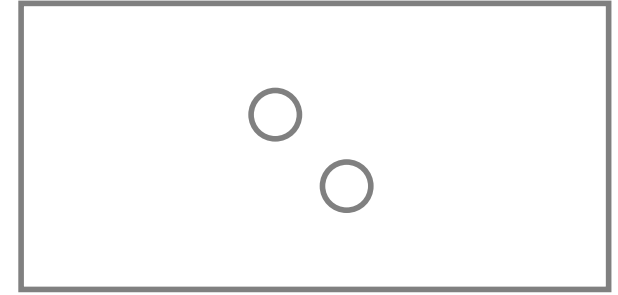
=




—



=

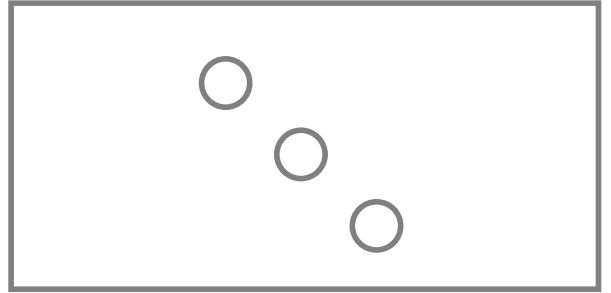





—





=




—



=

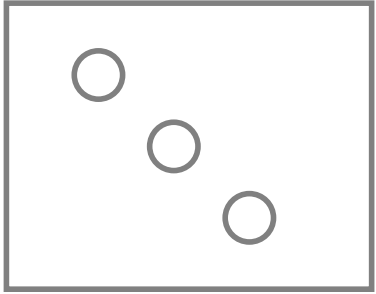


—




=






+




=



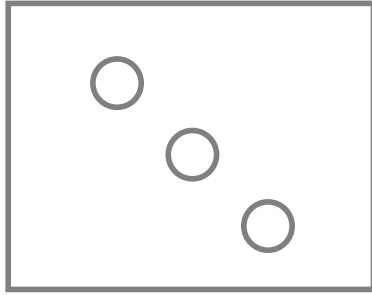
-



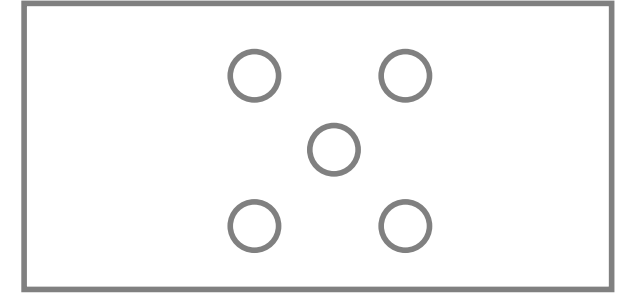
=



+



=



$4 + 5 + \square = 9$

$9 - 3 + 1 = \square$

$7 - \square - 2 = 3$

$\square + \square - \square = \square$

The first box is empty. The second box contains 2 dots. The third box contains 5 dots. The fourth box contains 4 dots.

$\square + \square + \square = \square$

The first box contains 1 dot. The second box is empty. The third box contains 3 dots. The fourth box contains 9 dots.

$\square - \square + \square = \square$

The first box contains 9 dots. The second box contains 6 dots. The third box contains 7 dots. The fourth box is empty.